

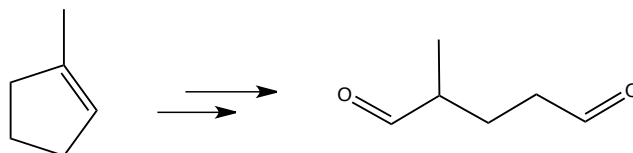
Quiz 4 (Wednesday Morning): Synthesis

Name:

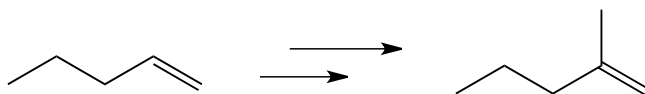
Recitation Instructor:

You have 45 minutes to figure out the following syntheses.

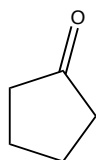
1. (3 points)



2. (3 points)



3. (4 points) Show a synthesis of C1=CC2CCCC2C1 using cyclopentanone as your only carbon-based starting material



cyclopentanone